


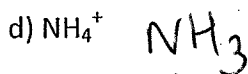
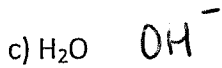



Item R: Conjugate Acids and Bases Practice

Write the formula of the conjugate acid of each Bronsted-Lowry base.



2. Write the formula for the conjugate base of each acid:



3. Identify the acid, base, conjugate acid, and conjugate base in each of the following reactions.

